











## Counting in Groups - Picture and Count (Specific Image)

<p>1 Each starfish has 5 arms. How many arms would there be on 6 starfishes?</p>  x 6	<p>A 33</p> <p>D 25</p>	<p>B 26</p> <p>E 30</p>	<p>C 34</p> <p>F 28</p>	<p>2 Each hand has 5 fingers. How many fingers would there be on 5 hands?</p>  x 5	<p>A 25</p> <p>D 22</p>	<p>B 28</p> <p>E 21</p>	<p>C 23</p>
<p>3 Each starfish has 5 arms. How many arms would there be on 2 starfishes?</p>  x 2	<p>A 5</p> <p>D 12</p>	<p>B 14</p> <p>E 10</p>	<p>C 8</p>	<p>4 Each hand has 5 fingers. How many fingers would there be on 6 hands?</p>  x 6	<p>A 25</p> <p>D 33</p>	<p>B 30</p> <p>E 27</p>	<p>C 32</p>
<p>5 Each hand has 5 fingers. How many fingers would there be on 9 hands?</p>  x 9	<p>A 43</p> <p>D 42</p>	<p>B 48</p>	<p>C 45</p>	<p>6 Each hand has 5 fingers. How many fingers would there be on 4 hands?</p>  x 4	<p>A 16</p>	<p>B 22</p>	<p>C 20</p>
<p>7 Each hand has 5 fingers. How many fingers would there be on 3 hands?</p>  x 3	<p>A 13</p> <p>D 17</p>	<p>B 11</p> <p>E 15</p>	<p>C 12</p>	<p>8 Each starfish has 5 arms. How many arms would there be on 9 starfishes?</p>  x 9	<p>A 45</p> <p>D 40</p>	<p>B 47</p> <p>E 41</p>	<p>C 48</p>