











Counting in Groups - Pictures and Skip Count (Specific Image)

<p>1 Skip count by 4, to find how many legs in total on 3 chairs?</p> 	A 10	B 7	C 12	<p>2 Skip count by 4, to find how many legs in total on 6 cows?</p> 	A 20	B 24	C 22
	D 14	E 15			D 28	E 27	
<p>3 Skip count by 4, to find how many legs in total on 9 cows?</p> 	A 32	B 33	C 34	<p>4 Skip count by 4, to find how many legs in total on 8 cows?</p> 	A 27	B 32	C 30
	D 36	E 40			D 28	E 34	
<p>5 Skip count by 4, to find how many legs in total on 9 chairs?</p> 	A 32	B 39	C 36	<p>6 Skip count by 4, to find how many legs in total on 2 chairs?</p> 	A 5	B 11	C 3
	D 33	E 31			D 6	E 8	
<p>7 Skip count by 4, to find how many legs in total on 4 chairs?</p> 	A 20	B 13	C 11	<p>8 Skip count by 4, to find how many legs in total on 4 cows?</p> 	A 14	B 20	C 11
	D 16				D 13	E 12	F 16