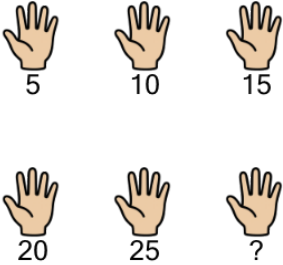




Counting in Groups - Pictures and Skip Count (Specific Image)




1 Skip count by 5, to find how many fingers in total on 6 hands?



A	B	C
32	33	25
D	E	F
30	27	34


2



Skip count by 5, to find how many fingers in total on 7 hands?


A	B
33	35

3 Skip count by 5, to find how many fingers in total on 2 hands?




A	B	C
6	10	13
D		
12		

4 Skip count by 5, to find how many arms in total on 9 starfishes?



A	B	C
43	47	45
D	E	
41	40	

5 Skip count by 5, to find how many arms in total on 4 starfishes?



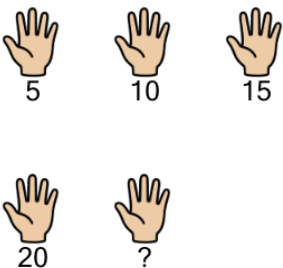
A	B	C
15	23	17
D	E	
24	20	

6 Skip count by 5, to find how many arms in total on 2 starfishes?




A	B	C
6	10	8
D	E	F
5	14	12

7 Skip count by 5, to find how many fingers in total on 5 hands?



A	B	C
20	25	27
D	E	
22	29	

8 Skip count by 5, to find how many arms in total on 8 starfishes?



A	B	C
40	37	35
D	E	
44	42	