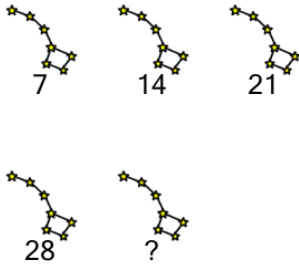




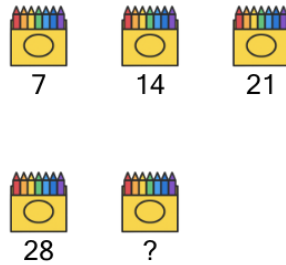
Counting in Groups - Pictures and Skip Count (Specific Image)

1 Skip count by 7, to find how many stars in total on 5 constellations?



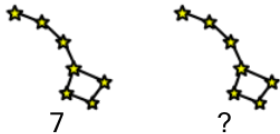
A	B	C
35	32	33
D		
31		

2 Skip count by 7, to find how many crayons in total on 5 boxes?



A	B	C
35	31	39

3 Skip count by 7, to find how many stars in total on 2 constellations?



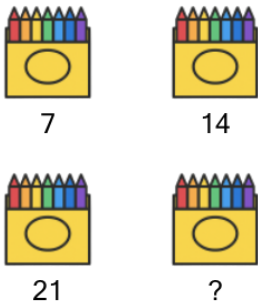
A	B	C
9	17	11
D		
14		

4 Skip count by 7, to find how many crayons in total on 2 boxes?



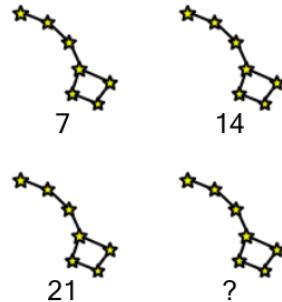
A	B	C
12	14	9
D	E	
18	11	

5 Skip count by 7, to find how many crayons in total on 4 boxes?



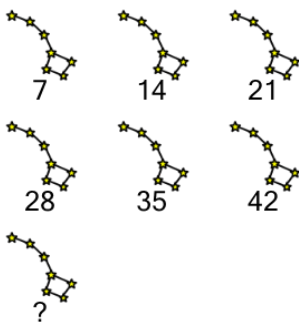
A	B	C
24	28	23
D	E	
26	32	

6 Skip count by 7, to find how many stars in total on 4 constellations?



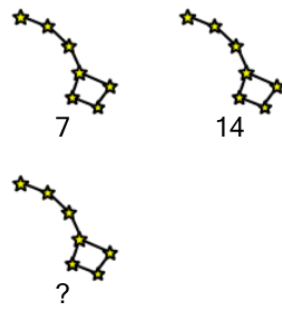
A	B	C
28	24	30

7 Skip count by 7, to find how many stars in total on 7 constellations?



A	B	C
49	44	46
D	E	
51	47	

8 Skip count by 7, to find how many stars in total on 3 constellations?



A	B	C
24	18	23
D	E	
19	21	