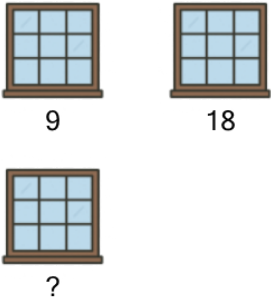


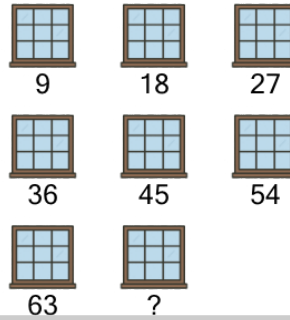
Counting in Groups - Pictures and Skip Count (Specific Image)

1 Skip count by 9, to find how many panes in total on 3 windows?



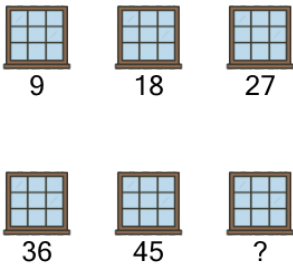
A	B	C
30	27	29
D	E	
24	25	

2 Skip count by 9, to find how many panes in total on 8 windows?



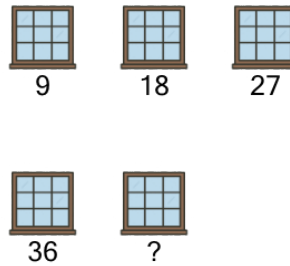
A	B	C
67	72	76

3 Skip count by 9, to find how many panes in total on 6 windows?




A	B	C
51	54	58

4 Skip count by 9, to find how many panes in total on 5 windows?



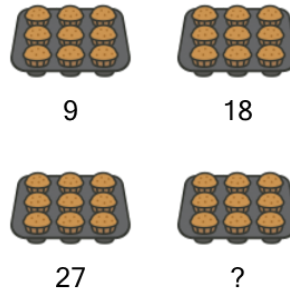
A	B	C
45	47	40
D		
42		

5 Skip count by 9, to find how many panes in total on 9 windows?



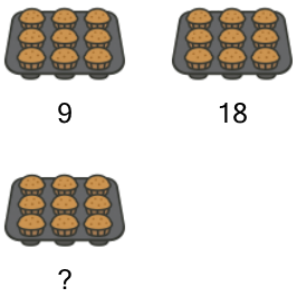
A	B	C
78	77	81
D	E	
83	84	

6 Skip count by 9, to find how many muffins in total on 4 trays?



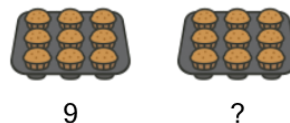
A	B	C
34	31	33
D		
36		

7 Skip count by 9, to find how many muffins in total on 3 trays?



A	B	C
22	24	31
D	E	F
27	25	29

8 Skip count by 9, to find how many muffins in total on 2 trays?



A	B	C
22	16	21
D		
18		