











Counting in Groups - Pictures (Specific Image)



| | | | | | | | |
|---|--------------------|--------------------|--------------------|---|--------------------|--------------------|--------------------|
| <p>1 Each chair has 4 legs. How many legs in total?</p>  | <p>A</p> <p>38</p> | <p>B</p> <p>34</p> | <p>C</p> <p>40</p> | <p>2 Each chair has 4 legs. How many legs in total?</p>  | <p>A</p> <p>11</p> | <p>B</p> <p>6</p> | <p>C</p> <p>4</p> |
| | <p>D</p> <p>36</p> | <p>E</p> <p>39</p> | | | <p>D</p> <p>8</p> | <p>E</p> <p>3</p> | |
| <p>3 Each cow has 4 legs. How many legs in total?</p>  | <p>A</p> <p>14</p> | <p>B</p> <p>8</p> | <p>C</p> <p>10</p> | <p>4 Each cow has 4 legs. How many legs in total?</p>  | <p>A</p> <p>11</p> | <p>B</p> <p>5</p> | <p>C</p> <p>3</p> |
| | <p>D</p> <p>12</p> | <p>E</p> <p>16</p> | | | <p>D</p> <p>8</p> | <p>E</p> <p>6</p> | <p>F</p> <p>12</p> |
| <p>5 Each cow has 4 legs. How many legs in total?</p>  | <p>A</p> <p>36</p> | <p>B</p> <p>32</p> | <p>C</p> <p>31</p> | <p>6 Each chair has 4 legs. How many legs in total?</p>  | <p>A</p> <p>11</p> | <p>B</p> <p>18</p> | <p>C</p> <p>12</p> |
| | <p>D</p> <p>34</p> | | | | <p>D</p> <p>16</p> | <p>E</p> <p>14</p> | |
| <p>7 Each cow has 4 legs. How many legs in total?</p>  | <p>A</p> <p>20</p> | <p>B</p> <p>16</p> | <p>C</p> <p>12</p> | <p>8 Each cow has 4 legs. How many legs in total?</p>  | <p>A</p> <p>27</p> | <p>B</p> <p>29</p> | <p>C</p> <p>34</p> |
| | | | | | <p>D</p> <p>28</p> | <p>E</p> <p>36</p> | <p>F</p> <p>32</p> |