









## Counting in Groups - Pictures (Specific Image)

<p><b>1</b> Each hand has 5 fingers. How many fingers in total?</p> 	<p>A</p> <p>37</p>	<p>B</p> <p>43</p>	<p>C</p> <p>42</p>	<p><b>2</b> Each starfish has 5 arms. How many arms in total?</p> 	<p>A</p> <p>43</p>	<p>B</p> <p>44</p>	<p>C</p> <p>42</p>
	<p>D</p> <p>38</p>	<p>E</p> <p>36</p>	<p>F</p> <p>40</p>		<p>D</p> <p>40</p>	<p>E</p> <p>35</p>	
<p><b>3</b> Each hand has 5 fingers. How many fingers in total?</p> 	<p>A</p> <p>24</p>	<p>B</p> <p>16</p>	<p>C</p> <p>20</p>	<p><b>4</b> Each hand has 5 fingers. How many fingers in total?</p> 	<p>A</p> <p>28</p>	<p>B</p> <p>33</p>	<p>C</p> <p>32</p>
	<p>D</p> <p>15</p>	<p>E</p> <p>22</p>	<p>F</p> <p>23</p>		<p>D</p> <p>34</p>	<p>E</p> <p>30</p>	<p>F</p> <p>26</p>
<p><b>5</b> Each hand has 5 fingers. How many fingers in total?</p> 	<p>A</p> <p>43</p>	<p>B</p> <p>45</p>	<p>C</p> <p>42</p>	<p><b>6</b> Each starfish has 5 arms. How many arms in total?</p> 	<p>A</p> <p>27</p>	<p>B</p> <p>23</p>	<p>C</p> <p>22</p>
	<p>D</p> <p>49</p>	<p>E</p> <p>48</p>			<p>D</p> <p>28</p>	<p>E</p> <p>25</p>	<p>F</p> <p>20</p>
<p><b>7</b> Each hand has 5 fingers. How many fingers in total?</p> 	<p>A</p> <p>11</p>	<p>B</p> <p>15</p>	<p>C</p> <p>10</p>	<p><b>8</b> Each hand has 5 fingers. How many fingers in total?</p> 	<p>A</p> <p>10</p>	<p>B</p> <p>8</p>	<p>C</p> <p>6</p>
	<p>D</p> <p>17</p>				<p>D</p> <p>12</p>	<p>E</p> <p>5</p>	