












Counting in Groups - Pictures (Specific Image)



<p>1 Each bee has 6 legs. How many legs in total?</p> 	A 20	B 13	C 18	<p>2 Each ant has 6 legs. How many legs in total?</p> 	A 48	B 43	C 52
	D 21	E 22			D 44	E 45	
<p>3 Each ant has 6 legs. How many legs in total?</p> 	A 7	B 14	C 12	<p>4 Each bee has 6 legs. How many legs in total?</p> 	A 44	B 40	C 38
	D 16				D 45	E 42	
<p>5 Each ant has 6 legs. How many legs in total?</p> 	A 24	B 19	C 22	<p>6 Each ant has 6 legs. How many legs in total?</p> 	A 36	B 34	C 38
	D 26				D 31		
<p>7 Each bee has 6 legs. How many legs in total?</p> 	A 58	B 57	C 54	<p>8 Each bee has 6 legs. How many legs in total?</p> 	A 22	B 20	C 24
	D 51	E 50			D 27	E 28	