


Counting in Groups - Pictures (Specific Image)

1 Each box has 7 crayons. How many crayons in total?



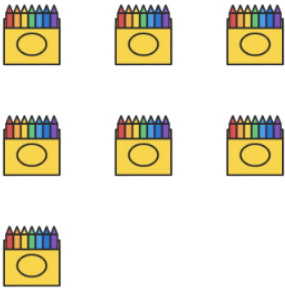
A	B	C
54	51	56

2 Each box has 7 crayons. How many crayons in total?



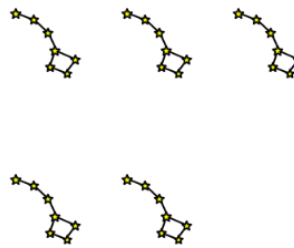
A	B	C
65	60	61

3 Each box has 7 crayons. How many crayons in total?



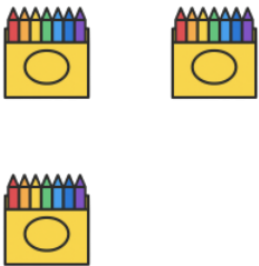
A	B	C
52	44	49

4 Each constellation has 7 stars. How many stars in total?



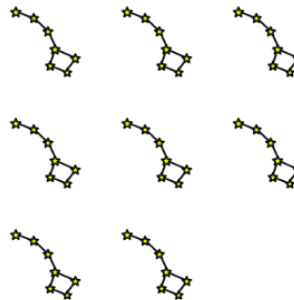
A	B	C
38	35	30

5 Each box has 7 crayons. How many crayons in total?



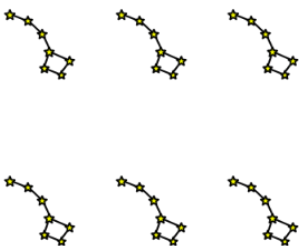
A	B	C
16	23	21

6 Each constellation has 7 stars. How many stars in total?



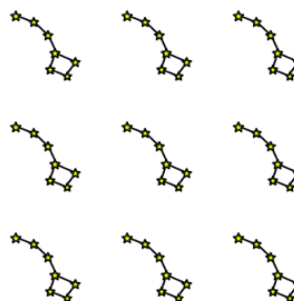
A	B	C
59	56	53

7 Each constellation has 7 stars. How many stars in total?



A	B	C
37	46	42

8 Each constellation has 7 stars. How many stars in total?



A	B	C
60	63	59

D	E	F
45		

D	E	F
67	58	66