









Counting in Groups - Pictures (Specific Image)

<p>1 Each spider has 8 legs. How many legs in total?</p> 	<p>A</p> <p>19</p>	<p>B</p> <p>24</p>	<p>C</p> <p>27</p>	<p>2 Each octopus has 8 legs. How many legs in total?</p> 	<p>A</p> <p>64</p>	<p>B</p> <p>66</p>	<p>C</p> <p>67</p>
	<p>D</p> <p>26</p>				<p>D</p> <p>60</p>		
<p>3 Each octopus has 8 legs. How many legs in total?</p> 	<p>A</p> <p>36</p>	<p>B</p> <p>32</p>	<p>C</p> <p>34</p>	<p>4 Each spider has 8 legs. How many legs in total?</p> 	<p>A</p> <p>36</p>	<p>B</p> <p>27</p>	<p>C</p> <p>34</p>
	<p>D</p> <p>35</p>	<p>E</p> <p>27</p>			<p>D</p> <p>32</p>		
<p>5 Each spider has 8 legs. How many legs in total?</p> 	<p>A</p> <p>16</p>	<p>B</p> <p>19</p>	<p>C</p> <p>11</p>	<p>6 Each spider has 8 legs. How many legs in total?</p> 	<p>A</p> <p>37</p>	<p>B</p> <p>35</p>	<p>C</p> <p>40</p>
	<p>D</p> <p>20</p>				<p>D</p> <p>42</p>	<p>E</p> <p>36</p>	<p>F</p> <p>43</p>
<p>7 Each octopus has 8 legs. How many legs in total?</p> 	<p>A</p> <p>26</p>	<p>B</p> <p>19</p>	<p>C</p> <p>24</p>	<p>8 Each spider has 8 legs. How many legs in total?</p> 	<p>A</p> <p>72</p>	<p>B</p> <p>75</p>	<p>C</p> <p>68</p>
	<p>D</p> <p>28</p>	<p>E</p> <p>21</p>	<p>F</p> <p>20</p>		<p>D</p> <p>67</p>	<p>E</p> <p>76</p>	<p>F</p> <p>74</p>