
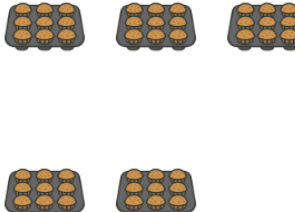

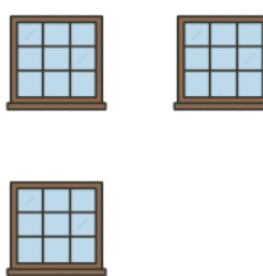
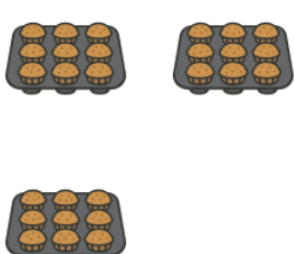
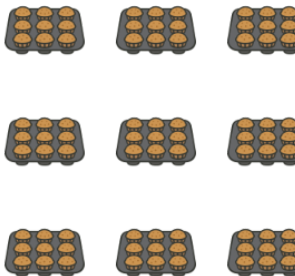




## Counting in Groups - Pictures (Specific Image)

<p><b>1</b> Each window has 9 panes. How many panes in total?</p> 	<p>A</p> <p>77</p>	<p>B</p> <p>76</p>	<p>C</p> <p>83</p>	<p><b>2</b> Each tray has 9 muffins. How many muffins in total?</p> 	<p>A</p> <p>40</p>	<p>B</p> <p>45</p>	<p>C</p> <p>41</p>
<p><b>3</b> Each window has 9 panes. How many panes in total?</p> 	<p>A</p> <p>76</p>	<p>B</p> <p>70</p>	<p>C</p> <p>75</p>	<p><b>4</b> Each window has 9 panes. How many panes in total?</p> 	<p>A</p> <p>27</p>	<p>B</p> <p>22</p>	<p>C</p> <p>29</p>
<p><b>5</b> Each tray has 9 muffins. How many muffins in total?</p> 	<p>A</p> <p>31</p>	<p>B</p> <p>29</p>	<p>C</p> <p>22</p>	<p><b>6</b> Each tray has 9 muffins. How many muffins in total?</p> 	<p>A</p> <p>84</p>	<p>B</p> <p>78</p>	<p>C</p> <p>81</p>
<p><b>7</b> Each tray has 9 muffins. How many muffins in total?</p> 	<p>A</p> <p>70</p>	<p>B</p> <p>72</p>	<p>C</p> <p>75</p>	<p><b>8</b> Each window has 9 panes. How many panes in total?</p> 	<p>A</p> <p>61</p>	<p>B</p> <p>59</p>	<p>C</p> <p>63</p>
<p>D</p> <p>81</p>	<p>E</p> <p>84</p>	<p>F</p> <p>85</p>	<p>D</p> <p>43</p>	<p>D</p> <p>60</p>	<p>E</p> <p>58</p>	<p>F</p> <p>66</p>	