



Counting in Groups - Total to Picture and Count (Specific Image)

1

15 leaves

Each clover has 3 leaves. How many clovers would have this many total leaves?



A



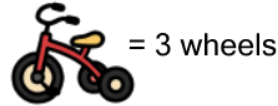
B



2

6 wheels

Each tricycle has 3 wheels. How many tricycles would have this many total wheels?



A



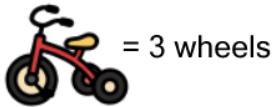
B



3

18 wheels

Each tricycle has 3 wheels. How many tricycles would have this many total wheels?



A



B



4

9 leaves

Each clover has 3 leaves. How many clovers would have this many total leaves?



A



B



5

6 leaves

Each clover has 3 leaves. How many clovers would have this many total leaves?



A



B



6

24 leaves

Each clover has 3 leaves. How many clovers would have this many total leaves?



A



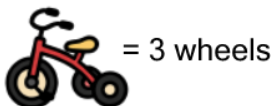
B



7

24 wheels

Each tricycle has 3 wheels. How many tricycles would have this many total wheels?



A



B



8

21 leaves

Each clover has 3 leaves. How many clovers would have this many total leaves?



A



B

