




Counting in Groups - Total to Picture and Count (Specific Image)

1

35 fingers

Each hand has 5 fingers. How many hands would have this many total fingers?


 = 5 fingers



A	B
 x 6	 x 7

2

45 arms

Each starfish has 5 arms. How many starfishes would have this many total arms?


 = 5 arms



A	B
 x 8	 x 9

3

25 arms

Each starfish has 5 arms. How many starfishes would have this many total arms?


 = 5 arms



A	B
 x 5	 x 6

4

30 arms

Each starfish has 5 arms. How many starfishes would have this many total arms?


 = 5 arms



A	B
 x 6	 x 7

5

10 arms

Each starfish has 5 arms. How many starfishes would have this many total arms?


 = 5 arms



A	B
 x 3	 x 2

6

45 fingers

Each hand has 5 fingers. How many hands would have this many total fingers?


 = 5 fingers



A	B
 x 8	 x 9

7

25 fingers

Each hand has 5 fingers. How many hands would have this many total fingers?


 = 5 fingers



A	B
 x 6	 x 5

8

15 fingers

Each hand has 5 fingers. How many hands would have this many total fingers?

 = 5 fingers

A	B
 x 3	 x 4