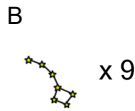
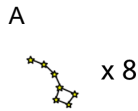
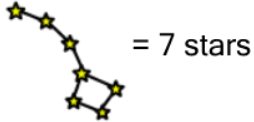


## Counting in Groups - Total to Picture and Count (Specific Image)

1

**63 stars**

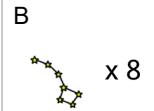
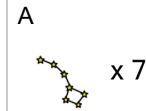
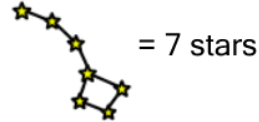
Each constellation has 7 stars. How many constellations would have this many total stars?



2

**49 stars**

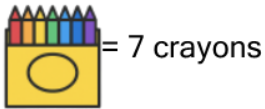
Each constellation has 7 stars. How many constellations would have this many total stars?



3

**63 crayons**

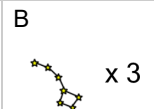
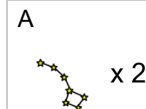
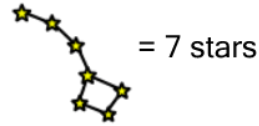
Each box has 7 crayons. How many boxes would have this many total crayons?



4

**14 stars**

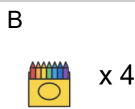
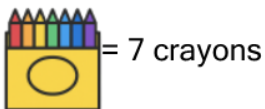
Each constellation has 7 stars. How many constellations would have this many total stars?



5

**28 crayons**

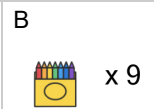
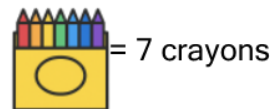
Each box has 7 crayons. How many boxes would have this many total crayons?



6

**56 crayons**

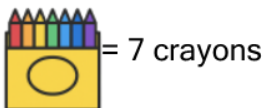
Each box has 7 crayons. How many boxes would have this many total crayons?



7

**49 crayons**

Each box has 7 crayons. How many boxes would have this many total crayons?



8

**28 stars**

Each constellation has 7 stars. How many constellations would have this many total stars?

