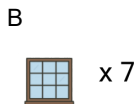
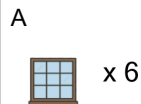
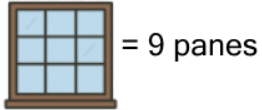


## Counting in Groups - Total to Picture and Count (Specific Image)

1

54 panes

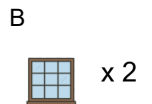
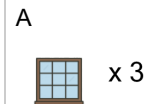
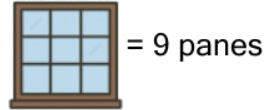
Each window has 9 panes. How many windows would have this many total panes?



2

27 panes

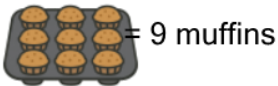
Each window has 9 panes. How many windows would have this many total panes?



3

27 muffins

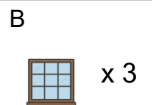
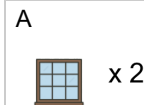
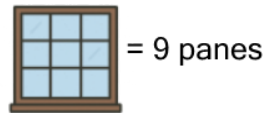
Each tray has 9 muffins. How many trays would have this many total muffins?



4

18 panes

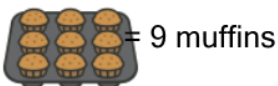
Each window has 9 panes. How many windows would have this many total panes?



5

72 muffins

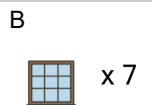
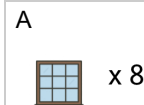
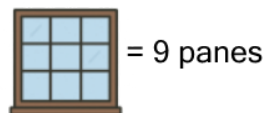
Each tray has 9 muffins. How many trays would have this many total muffins?



6

72 panes

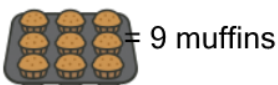
Each window has 9 panes. How many windows would have this many total panes?



7

54 muffins

Each tray has 9 muffins. How many trays would have this many total muffins?



8

18 muffins

Each tray has 9 muffins. How many trays would have this many total muffins?

