










Counting in Groups - Total to Picture Groups (Specific Image)

1

36 legs

Each cow has 4 legs. How many cows would have this many total legs?


 = 4 legs





A 	B 
	
	

2

12 legs

Each chair has 4 legs. How many chairs would have this many total legs?


 = 4 legs



A 	B 
	

3

8 legs

Each cow has 4 legs. How many cows would have this many total legs?


 = 4 legs





A 	B 
--	---

4

16 legs

Each chair has 4 legs. How many chairs would have this many total legs?


 = 4 legs



A 	B 
	

5

36 legs

Each chair has 4 legs. How many chairs would have this many total legs?


 = 4 legs

A 	B 
---	---

6

16 legs

Each cow has 4 legs. How many cows would have this many total legs?


 = 4 legs



A 	B 
---	---

7

24 legs

Each chair has 4 legs. How many chairs would have this many total legs?


 = 4 legs



A 	B 
---	---

8

20 legs

Each chair has 4 legs. How many chairs would have this many total legs?

 = 4 legs

A 	B 
---	---