






Counting in Groups - Total to Picture Groups (Specific Image)

1

21 crayons

Each box has 7 crayons. How many boxes would have this many total crayons?


 = 7 crayons





A		B	
			

2

49 crayons

Each box has 7 crayons. How many boxes would have this many total crayons?


 = 7 crayons







A		B	
			

3

63 crayons

Each box has 7 crayons. How many boxes would have this many total crayons?


 = 7 crayons





A		B	
			
			

4

28 crayons

Each box has 7 crayons. How many boxes would have this many total crayons?


 = 7 crayons

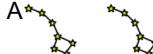
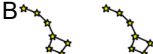

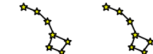
A		B	
			

5

21 stars

Each constellation has 7 stars. How many constellations would have this many total stars?


 = 7 stars

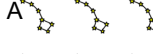
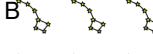
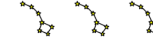
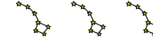
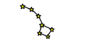
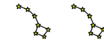
A		B	
			

6

56 stars

Each constellation has 7 stars. How many constellations would have this many total stars?


 = 7 stars

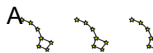
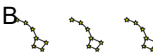
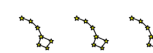
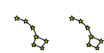
A		B	
			
			

7

35 stars

Each constellation has 7 stars. How many constellations would have this many total stars?


 = 7 stars


A		B	
			

8

14 stars

Each constellation has 7 stars. How many constellations would have this many total stars?

 = 7 stars

A		B	