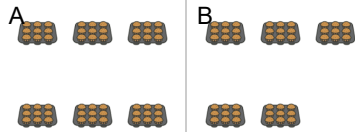
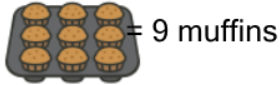


## Counting in Groups - Total to Picture Groups (Specific Image)

1

45 muffins

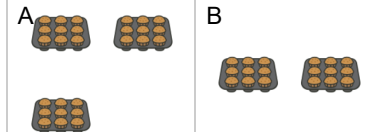
Each tray has 9 muffins. How many trays would have this many total muffins?



2

27 muffins

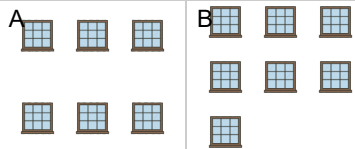
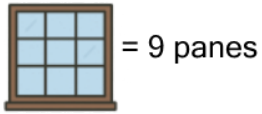
Each tray has 9 muffins. How many trays would have this many total muffins?



3

63 panes

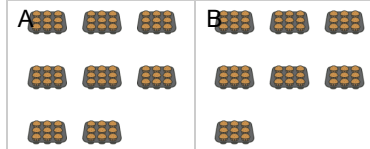
Each window has 9 panes. How many windows would have this many total panes?



4

63 muffins

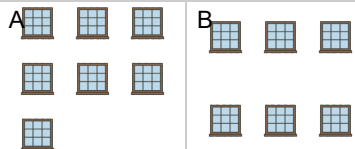
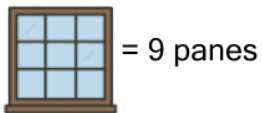
Each tray has 9 muffins. How many trays would have this many total muffins?



5

54 panes

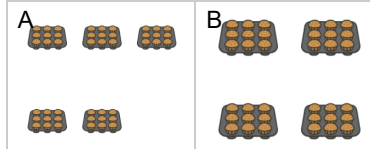
Each window has 9 panes. How many windows would have this many total panes?



6

36 muffins

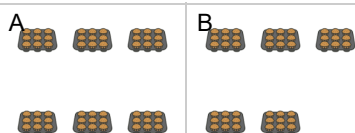
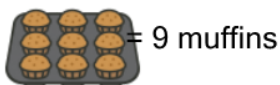
Each tray has 9 muffins. How many trays would have this many total muffins?



7

54 muffins

Each tray has 9 muffins. How many trays would have this many total muffins?



8

45 panes

Each window has 9 panes. How many windows would have this many total panes?

