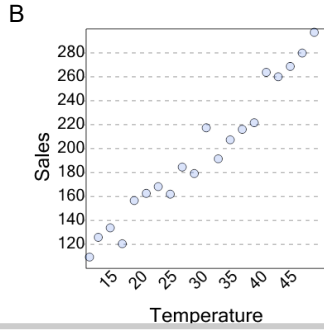
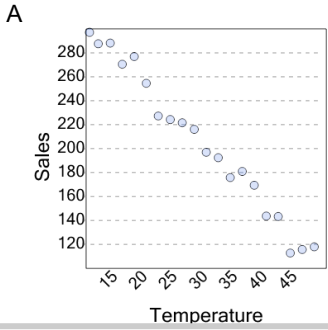


Graphing - Scatter Plot (Linear) - Correlation Direction to Graph

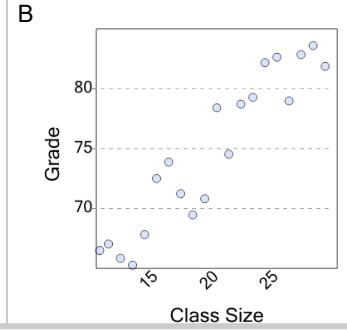
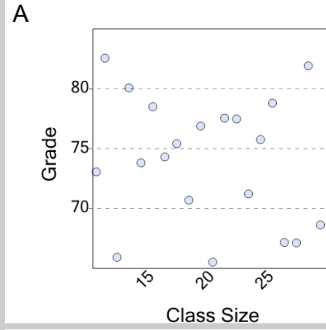
1 Which graph shows this correlation?

negative correlation



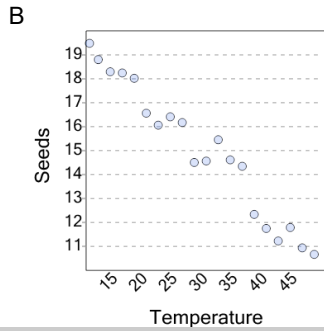
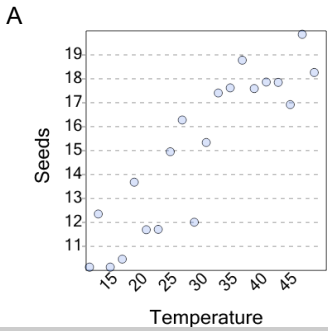
2 Which graph shows this correlation?

no correlation



3 Which graph shows this correlation?

positive correlation



Blank space for student response to question 1.

Blank space for student response to question 2.

Blank space for student response to question 3.

Blank space for student response to question 3.