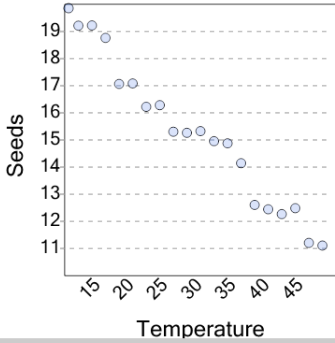




Graphing - Scatter Plot (Linear) - Graph to Prediction From Y True/False

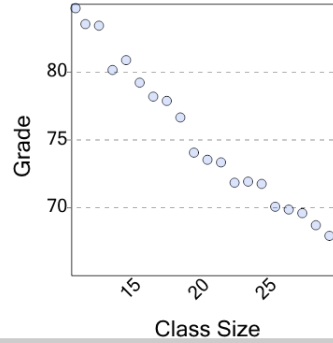
1



If seeds is 13.5, would 36 be a reasonable value of temperature?

A	B
Yes	No

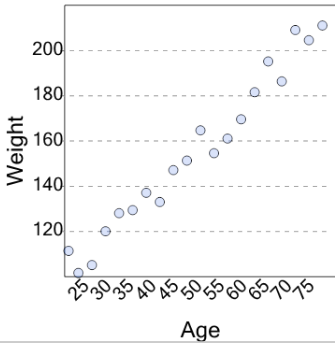
2



If grade is 81, would 14 be a reasonable value of class size?

A	B
Yes	No

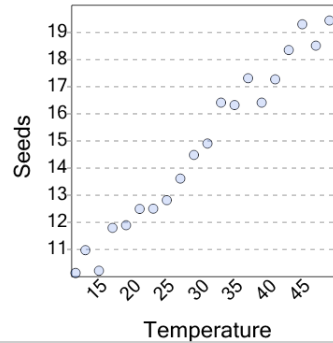
3



If weight is 160, would 26 be a reasonable value of age?

A	B
Yes	No

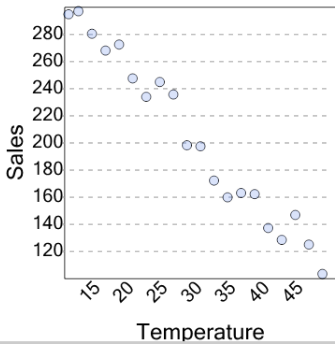
4



If seeds is 12, would 38 be a reasonable value of temperature?

A	B
Yes	No

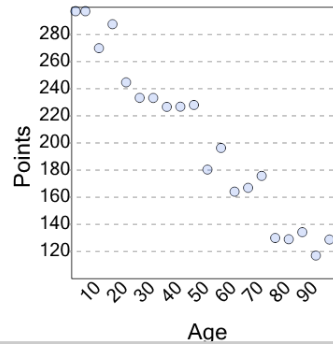
5



If sales is 170, would 36 be a reasonable value of temperature?

A	B
Yes	No

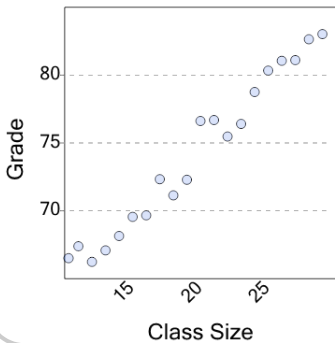
6



If points is 170, would 5 be a reasonable value of age?

A	B
Yes	No

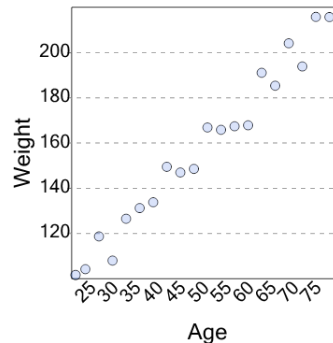
7



If grade is 72, would 17 be a reasonable value of class size?

A	B
Yes	No

8



If weight is 124, would 32 be a reasonable value of age?

A	B
Yes	No