



Decimal Concept Comparison - Picture Hundredths vs Decimal Number

Hundredths

1 Choose the correct equality operator



0.75

A < B = C >

2 Choose the correct equality operator

0.5



A < B = C >

3 Choose the correct equality operator




0.65

A < B = C >

4 Choose the correct equality operator


0.25



A < B = C >

5 Choose the correct equality operator

0.92



A < B = C >

6 Choose the correct equality operator




0.79

A < B = C >


7 Choose the correct equality operator

0.71



A < B = C >

8 Choose the correct equality operator



0.76

A < B = C >