





Decimal Concept Comparison - Picture Hundredths vs Decimal Number Tenths



1 Choose the correct equality operator

0.6



A

<

B


=

C

>

2 Choose the correct equality operator

0.3



A

<

B

=

C

>

3 Choose the correct equality operator



0.9

A

<

B


=

C

>

4 Choose the correct equality operator

0.4



A

<

B


=

C

>

5 Choose the correct equality operator

0.5



A

<

B

=

C

>

6 Choose the correct equality operator



0.1

A

<


B

=

C

>

7 Choose the correct equality operator



0.1

A

<

B


=

C

>

8 Choose the correct equality operator

0.9



A

<

B

=

C

>