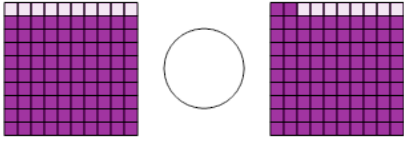




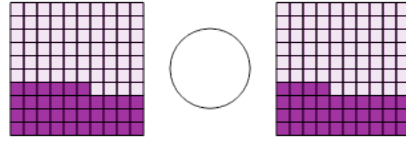
Decimal Concept Comparison - Picture Hundredths vs Picture Hundredths

1 Choose the correct equality operator



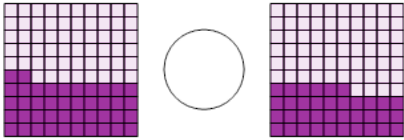
A	B	C
<	=	>

2 Choose the correct equality operator



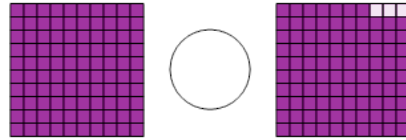
A	B	C
<	=	>

3 Choose the correct equality operator



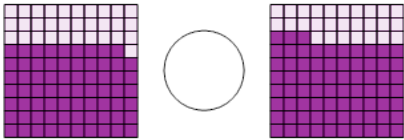
A	B	C
<	=	>

4 Choose the correct equality operator



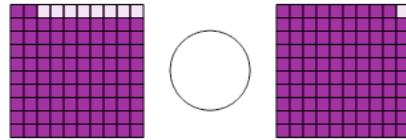
A	B	C
<	=	>

5 Choose the correct equality operator



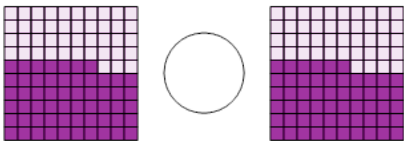
A	B	C
<	=	>

6 Choose the correct equality operator



A	B	C
<	=	>

7 Choose the correct equality operator



A	B	C
<	=	>

8 Choose the correct equality operator



A	B	C
<	=	>