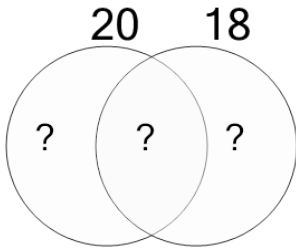




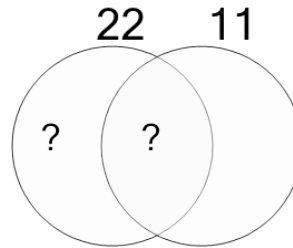
Factoring - Venn Diagrams - 2 Numbers - To Distinct Factors

1 Populate the factor diagram and find the distinct prime factors of these numbers.



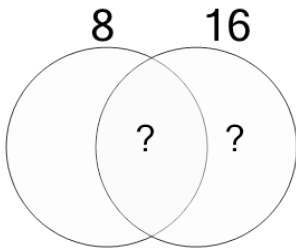
- A {2, 4, 5, 3, 3}
- B {5, 2, 5, 3, 3}
- C {2, 2, 5, 3, 3, 6}
- D {2, 2, 5, 3, 3}
- E {2, 2, 5, 3, 5}
- F {2, 5, 3, 3}

2 Populate the factor diagram and find the distinct prime factors of these numbers.



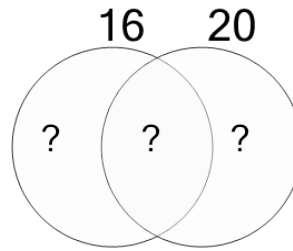
- A {7, 11, 3, 5, 5}
- B {2, 7, 5, 3}
- C {2, 7, 5, 3, 3}
- D {2, 11}
- E {5, 11, 5, 4, 4}
- F {11}

3 Populate the factor diagram and find the distinct prime factors of these numbers.



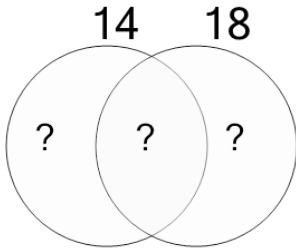
- A {2, 2, 2, 7}
- B {2, 2, 2, 2, 6}
- C {2, 2, 5, 2}
- D {2, 2, 2}
- E {2, 2, 2, 2, 2}
- F {2, 2, 2, 2}

4 Populate the factor diagram and find the distinct prime factors of these numbers.



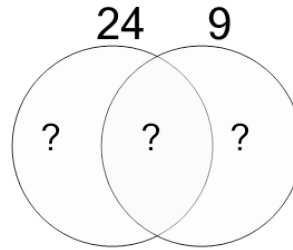
- A {2, 2, 2, 2, 5, 3}
- B {2, 2, 2, 2, 5, 5}
- C {2, 2, 2, 2, 5, 2}
- D {2, 2, 2, 2, 5}
- E {2, 2, 2, 2}
- F {2, 2, 2, 2, 4}

5 Populate the factor diagram and find the distinct prime factors of these numbers.



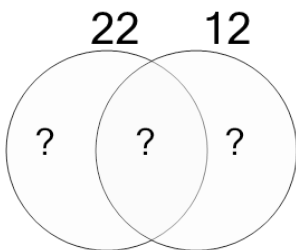
- A {2, 7, 3, 3}
- B {2, 3, 3}
- C {6, 7, 3, 3}
- D {2, 7, 5, 3}
- E {2, 2, 3, 3}
- F {2, 7, 3, 2}

6 Populate the factor diagram and find the distinct prime factors of these numbers.



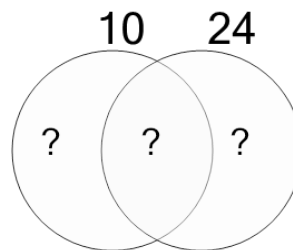
- A {2, 2, 2, 3, 3}
- B {2, 2, 2, 3, 3, 5}
- C {2, 2, 2, 3, 2}
- D {2, 2, 3, 3}
- E {2, 2, 2, 3}
- F {6, 2, 2, 3, 3}

7 Populate the factor diagram and find the distinct prime factors of these numbers.



- A {11, 2, 3}
- B {2, 11, 2, 3, 3}
- C {2, 11, 2, 3, 4}
- D {2, 11, 2, 3, 6}
- E {2, 11, 2}
- F {2, 11, 2, 3}

8 Populate the factor diagram and find the distinct prime factors of these numbers.



- A {2, 5, 4, 2, 3}
- B {2, 5, 2, 2, 3}
- C {2, 5, 2, 2, 3, 2}
- D {2, 5, 2, 2, 3, 3}
- E {2, 5, 2, 3}
- F {2, 2, 2, 3}