

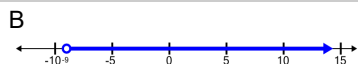



Function Domain/Range Definition - Interval to Number Line (Without Union)

1

Which number line shows this range?

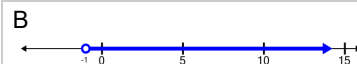
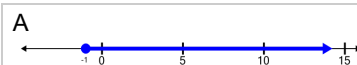
$$(-9, \infty)$$



2

Which number line shows this range?

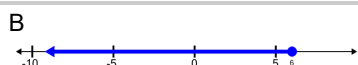
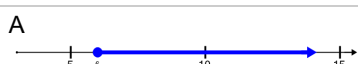
$$(-1, \infty)$$



3

Which number line shows this domain?

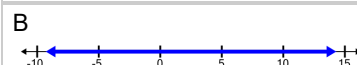
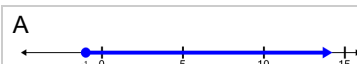
$$(-\infty, 6]$$



4

Which number line shows this domain?

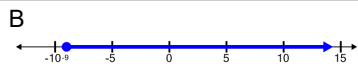
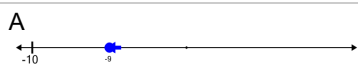
$$[-1, \infty)$$



5

Which number line shows this domain?

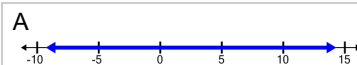
$$[-9, \infty)$$



6

Which number line shows this range?



$$(-\infty, \infty)$$



7

Which number line shows this domain?

$$(-\infty, -5]$$



8

Which number line shows this domain?

$$(-\infty, 3)$$

