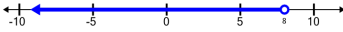






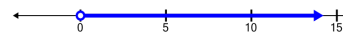





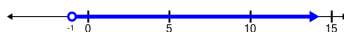




Function Domain/Range Definition - Words to Number Line (Without Union)

<p>1 Which number line shows this range?</p> <p>A </p>	<p>All real numbers less than 8</p> <p>B </p>	<p>2 Which number line shows this domain?</p> <p>A </p>	<p>All real numbers greater than -3 and less than 8</p> <p>B </p>
<p>3 Which number line shows this range?</p> <p>A </p>	<p>All real numbers greater than 1</p> <p>B </p>	<p>4 Which number line shows this range?</p> <p>A </p>	<p>All real numbers</p> <p>B </p>
<p>5 Which number line shows this domain?</p> <p>A </p>	<p>All real numbers less than 1</p> <p>B </p>	<p>6 Which number line shows this domain?</p> <p>A </p>	<p>All real numbers less than or equal to 3</p> <p>B </p>
<p>7 Which number line shows this domain?</p> <p>A </p>	<p>All real numbers greater than -1</p> <p>B </p>	<p>8 Which number line shows this domain?</p> <p>A </p>	<p>All real numbers greater than or equal to -3 and less than 0</p> <p>B </p>