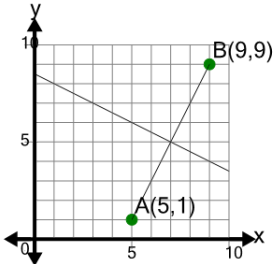




## Line Segment (Graph) - Find Perpendicular Slope (True/False)

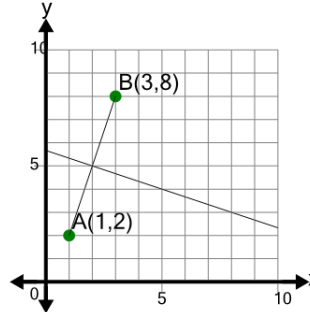
1



Is the slope of the PERPENDICULAR to segment AB equal to  $-1/2$

A	B
Yes	No

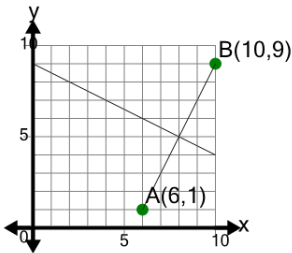
2



Is the slope of the PERPENDICULAR to segment AB equal to 3

A	B
Yes	No

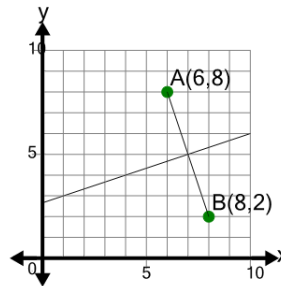
3



Is the slope of the PERPENDICULAR to segment AB equal to 2

A	B
Yes	No

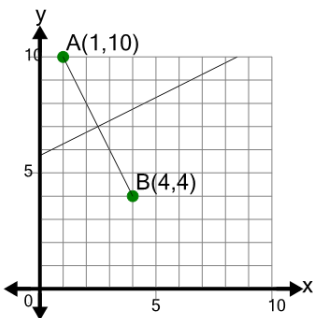
4



Is the slope of the PERPENDICULAR to segment AB equal to  $1/3$

A	B
Yes	No

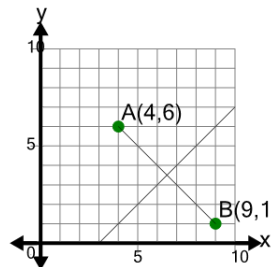
5



Is the slope of the PERPENDICULAR to segment AB equal to  $-2$

A	B
Yes	No

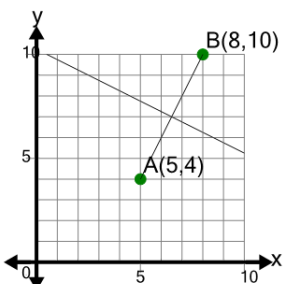
6



Is the slope of the PERPENDICULAR to segment AB equal to  $-1$

A	B
Yes	No

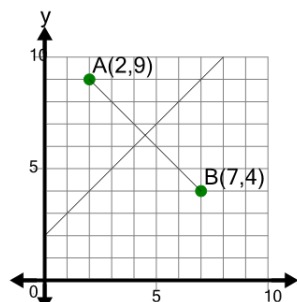
7



Is the slope of the PERPENDICULAR to segment AB equal to 2

A	B
Yes	No

8



Is the slope of the PERPENDICULAR to segment AB equal to  $-1$

A	B
Yes	No