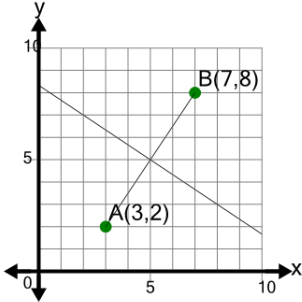


## Line Segment (Graph) - Find Perpendicular Slope (True/False)

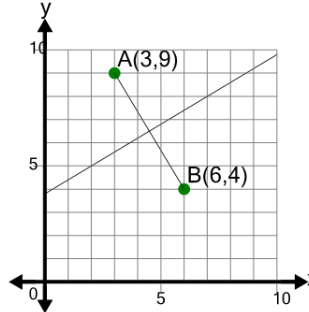
1



Is the slope of the PERPENDICULAR to segment AB equal to  $-2/3$

A	B
Yes	No

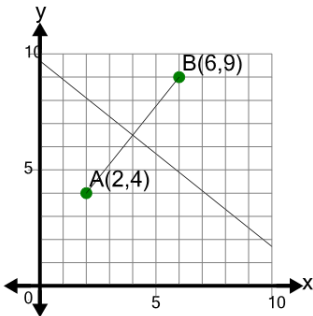
2



Is the slope of the PERPENDICULAR to segment AB equal to  $-5/3$

A	B
Yes	No

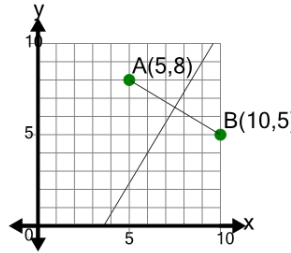
3



Is the slope of the PERPENDICULAR to segment AB equal to  $-4/5$

A	B
Yes	No

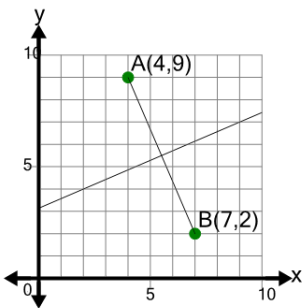
4



Is the slope of the PERPENDICULAR to segment AB equal to  $-3/5$

A	B
Yes	No

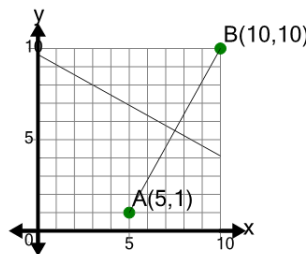
5



Is the slope of the PERPENDICULAR to segment AB equal to  $-7/3$

A	B
Yes	No

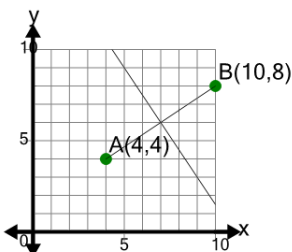
6



Is the slope of the PERPENDICULAR to segment AB equal to  $-5/9$

A	B
Yes	No

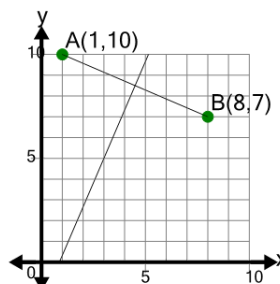
7



Is the slope of the PERPENDICULAR to segment AB equal to  $2/3$

A	B
Yes	No

8



Is the slope of the PERPENDICULAR to segment AB equal to  $-3/7$

A	B
Yes	No