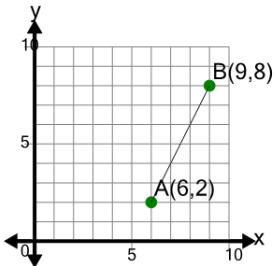


## Line Segment (Graph) - Find Slope (True/False)

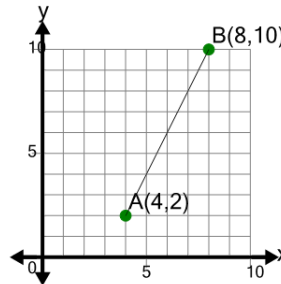
1



Is the slope of segment AB equal to  $\frac{1}{2}$

A	B
Yes	No

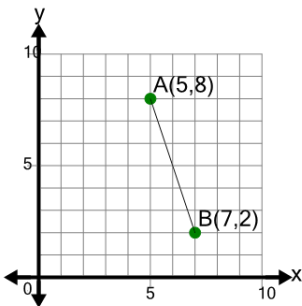
2



Is the slope of segment AB equal to 2

A	B
Yes	No

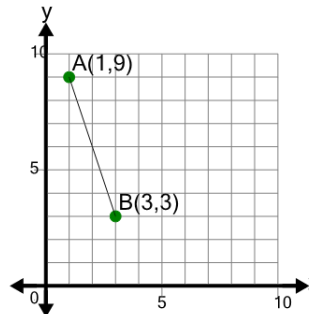
3



Is the slope of segment AB equal to -3

A	B
Yes	No

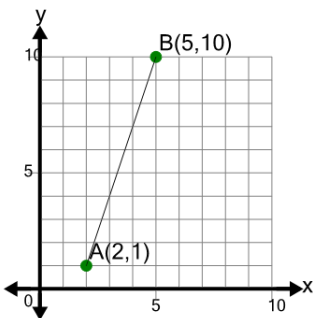
4



Is the slope of segment AB equal to -3

A	B
Yes	No

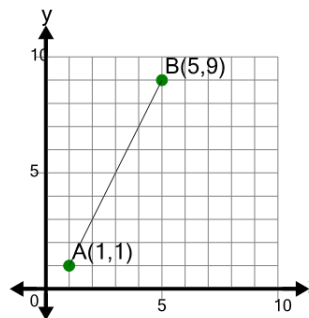
5



Is the slope of segment AB equal to 3

A	B
Yes	No

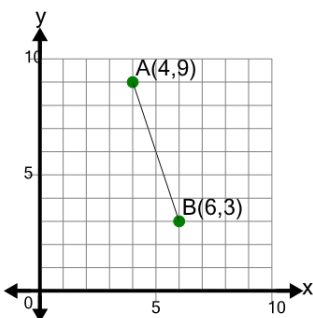
6



Is the slope of segment AB equal to 2

A	B
Yes	No

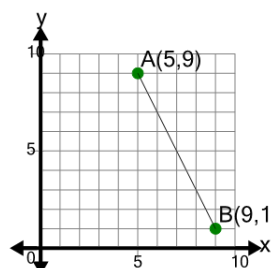
7



Is the slope of segment AB equal to -3

A	B
Yes	No

8



Is the slope of segment AB equal to  $-\frac{1}{2}$

A	B
Yes	No