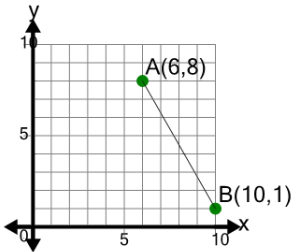


## Line Segment (Graph) - Find Slope (True/False)

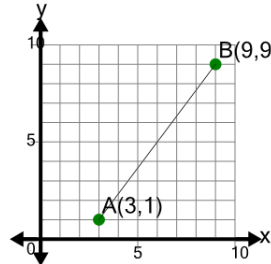
1



Is the slope of segment AB equal to  $-7/4$

A	B
Yes	No

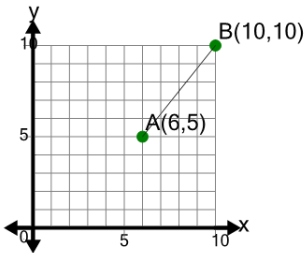
2



Is the slope of segment AB equal to  $3/4$

A	B
Yes	No

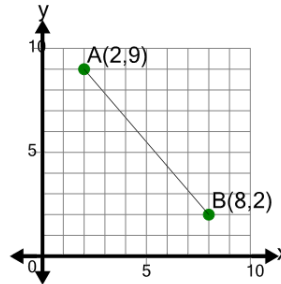
3



Is the slope of segment AB equal to  $4/5$

A	B
Yes	No

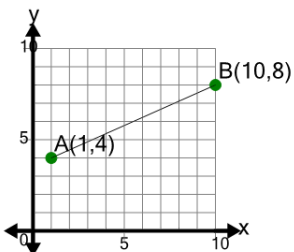
4



Is the slope of segment AB equal to  $-7/6$

A	B
Yes	No

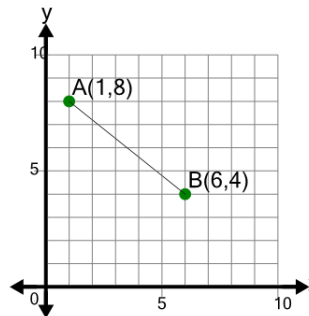
5



Is the slope of segment AB equal to  $4/9$

A	B
Yes	No

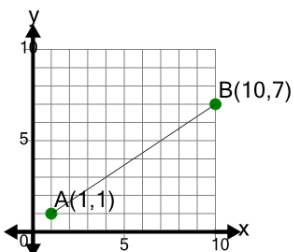
6



Is the slope of segment AB equal to  $-4/5$

A	B
Yes	No

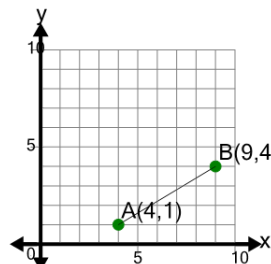
7



Is the slope of segment AB equal to  $3/2$

A	B
Yes	No

8



Is the slope of segment AB equal to  $3/5$

A	B
Yes	No