

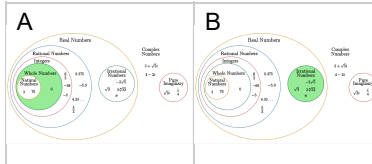


Number Types (Complex) - Number to Diagram Section - Real, Imaginary, and Complex Numbers

1

$$\frac{0}{10}$$

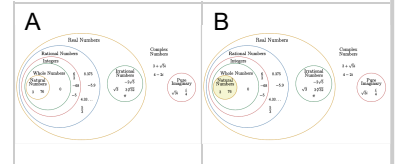
Select the narrowest grouping that matches this number type



2

$$\sqrt{\frac{50}{2}}$$

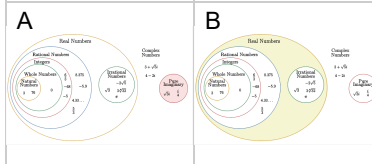
Select the narrowest grouping that matches this number type



3

$$\sqrt{31}i$$

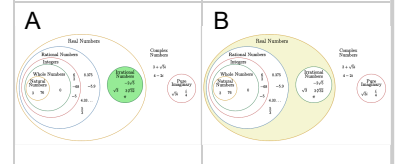
Select the narrowest grouping that matches this number type



4

$$\frac{\sqrt{29}}{3}$$

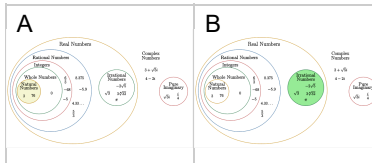
Select the narrowest grouping that matches this number type



5

$$\sqrt{\frac{80}{5}}$$

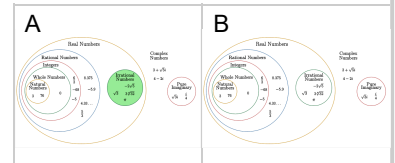
Select the narrowest grouping that matches this number type



6

$$\frac{\sqrt{31}}{3}$$

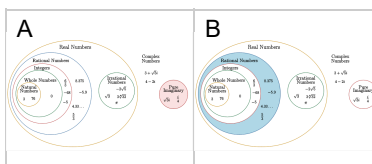
Select the narrowest grouping that matches this number type



7

$$\frac{\sqrt{41}i}{8}$$

Select the narrowest grouping that matches this number type



8

$$\frac{\sqrt{79}i}{5}$$

Select the narrowest grouping that matches this number type

