

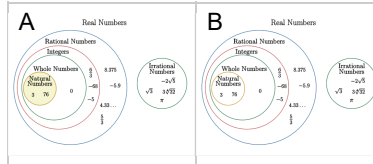


Number Types (Real) - Number to Diagram Section - Whole, Natural, Integer, Rational, Irrational Numbers

1

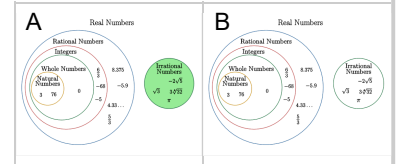
$$\frac{\sqrt{80}}{5}$$

Select the narrowest grouping that matches this number type



$$\frac{\sqrt{3}}{9}$$

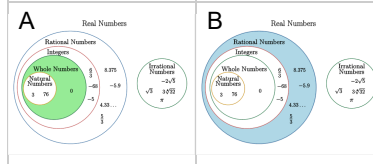
Select the narrowest grouping that matches this number type



3

$$0.\overline{14}$$

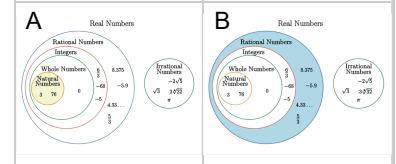
Select the narrowest grouping that matches this number type



4

$$0.\overline{3}$$

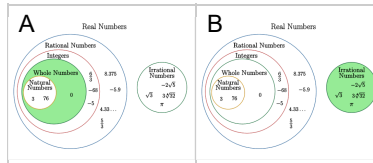
Select the narrowest grouping that matches this number type



5

$$\frac{\sqrt{53}}{5}$$

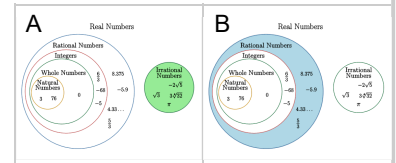
Select the narrowest grouping that matches this number type



6

$$\frac{16}{81}$$

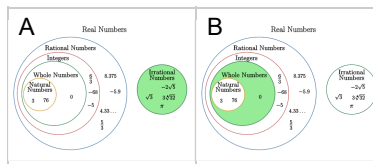
Select the narrowest grouping that matches this number type



7

$$\frac{\sqrt{2}}{7}$$

Select the narrowest grouping that matches this number type



8

$$\frac{\sqrt{47}}{9}$$

Select the narrowest grouping that matches this number type

