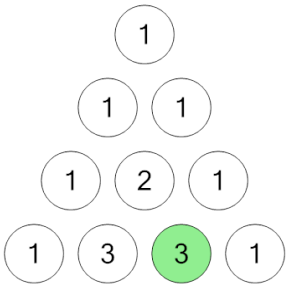




Combinations - Triangle Value to nCr Notation

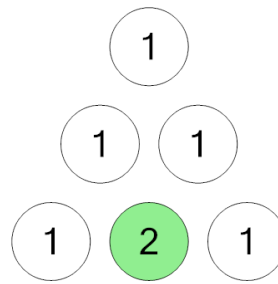
1 Which combination matches the highlighted entry of Pascal's triangle?



A $3C_1$ B $3C_3$ C $2C_3$

D $3C_2$

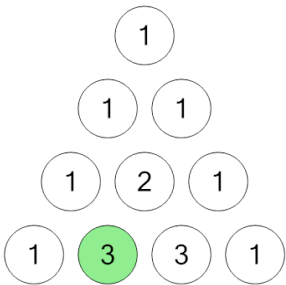
2 Which combination matches the highlighted entry of Pascal's triangle?



A $2C_0$ B $1C_2$ C $2C_1$

D $2C_2$

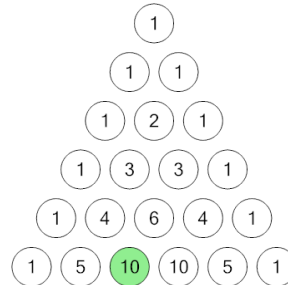
3 Which combination matches the highlighted entry of Pascal's triangle?



A $1C_3$ B $3C_0$ C $3C_1$

D $3C_2$

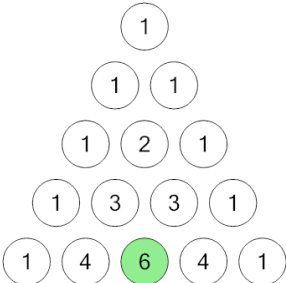
4 Which combination matches the highlighted entry of Pascal's triangle?



A $5C_3$ B $2C_5$ C $5C_2$

D $5C_1$

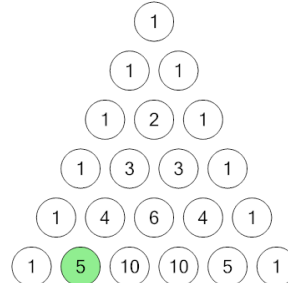
5 Which combination matches the highlighted entry of Pascal's triangle?



A $4C_2$ B $4C_3$ C $4C_1$

D $2C_4$

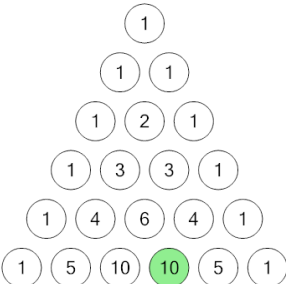
6 Which combination matches the highlighted entry of Pascal's triangle?



A $5C_2$ B $1C_5$ C $5C_0$

D $5C_1$

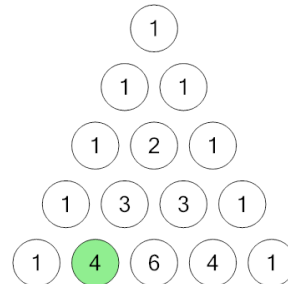
7 Which combination matches the highlighted entry of Pascal's triangle?



A $5C_3$ B $5C_2$ C $3C_5$

D $5C_4$

8 Which combination matches the highlighted entry of Pascal's triangle?



A $1C_4$ B $4C_0$ C $4C_1$

D $4C_2$