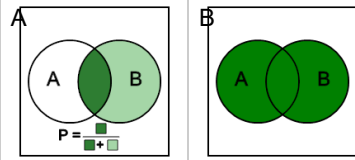


Probability Union, Intersection, Complement - Set Operation to Venn Diagram

1

Which Venn diagram represents this probability set operation

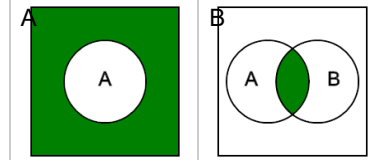
$$P(A|B)$$



2

Which Venn diagram represents this probability set operation

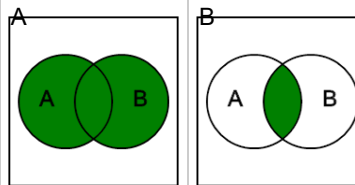
$$P(A')$$



3

Which Venn diagram represents this probability set operation

$$P(A \cup B)$$



4

Which Venn diagram represents this probability set operation

$$P(A \cap B)$$

