




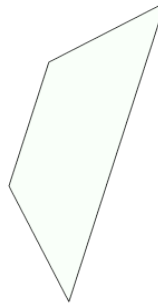
Classifying Polygons by Sides and Regular or Irregular

1 Name the type of shape



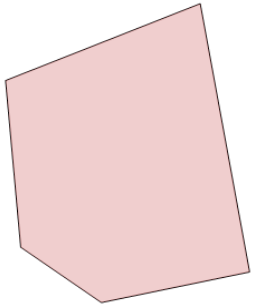
- A Regular hexagon
- B Regular pentagon
- C Irregular quadrilateral
- D Regular quadrilateral
- E Irregular octagon
- F Regular octagon

2 Name the type of shape



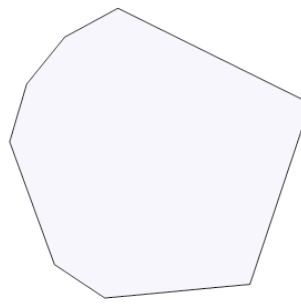
- A Regular octagon
- B Regular hexagon
- C Irregular quadrilateral
- D Regular quadrilateral
- E Regular pentagon
- F Irregular octagon

3 Name the type of shape



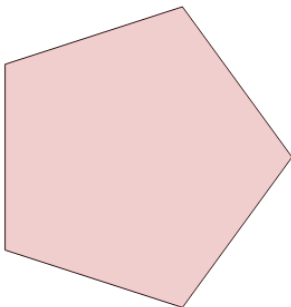
- A Irregular hexagon
- B Regular pentagon
- C Regular octagon
- D Regular quadrilateral
- E Irregular pentagon
- F Regular hexagon

4 Name the type of shape



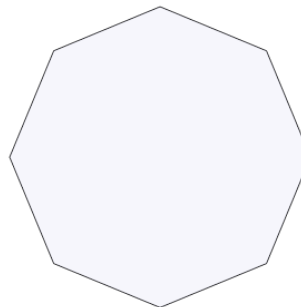
- A Irregular octagon
- B Regular quadrilateral
- C Regular hexagon
- D Regular pentagon
- E Irregular hexagon
- F Regular octagon

5 Name the type of shape



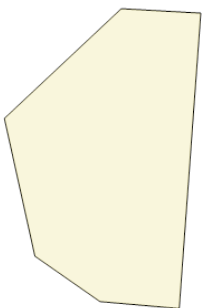
- A Irregular quadrilateral
- B Regular pentagon
- C Irregular pentagon
- D Irregular hexagon
- E Regular hexagon
- F Regular octagon

6 Name the type of shape



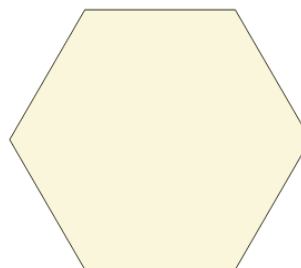
- A Regular octagon
- B Regular pentagon
- C Irregular quadrilateral
- D Irregular hexagon
- E Irregular pentagon
- F Irregular octagon

7 Name the type of shape



- A Regular quadrilateral
- B Regular pentagon
- C Irregular hexagon
- D Regular hexagon
- E Regular octagon
- F Irregular quadrilateral

8 Name the type of shape



- A Irregular hexagon
- B Regular hexagon
- C Irregular octagon
- D Irregular quadrilateral
- E Regular pentagon
- F Regular quadrilateral