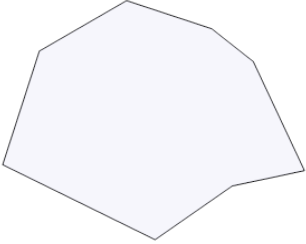
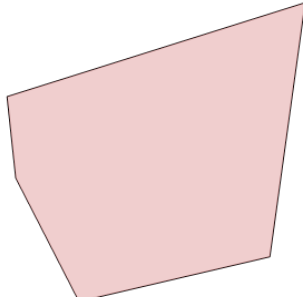

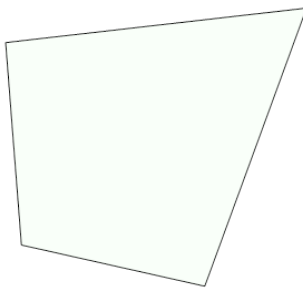
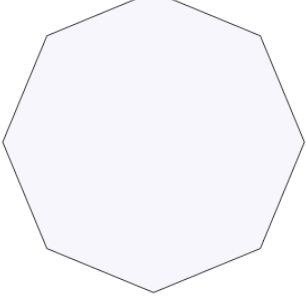
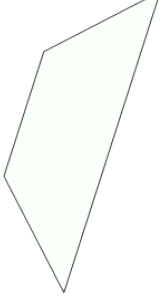
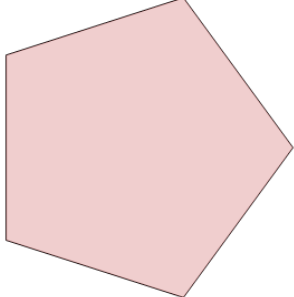
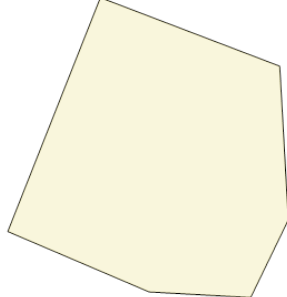


Classifying Polygons by Sides and Regular or Irregular

<p>1 Name the type of shape</p> 	<p>A Regular pentagon B Irregular octagon C Irregular quadrilateral D Regular quadrilateral E Irregular hexagon F Regular octagon</p>	<p>2 Name the type of shape</p> 	<p>A Irregular quadrilateral B Regular quadrilateral C Irregular pentagon D Irregular hexagon E Regular octagon F Irregular octagon</p>
<p>3 Name the type of shape</p> 	<p>A Regular octagon B Regular quadrilateral C Regular hexagon D Irregular quadrilateral E Irregular octagon F Regular pentagon</p>	<p>4 Name the type of shape</p> 	<p>A Irregular quadrilateral B Irregular pentagon C Regular octagon D Regular hexagon E Regular quadrilateral F Regular pentagon</p>
<p>5 Name the type of shape</p> 	<p>A Regular pentagon B Irregular quadrilateral C Irregular pentagon D Irregular hexagon E Regular octagon F Irregular octagon</p>	<p>6 Name the type of shape</p> 	<p>A Regular pentagon B Regular octagon C Regular hexagon D Irregular octagon E Regular quadrilateral F Irregular quadrilateral</p>
<p>7 Name the type of shape</p> 	<p>A Irregular quadrilateral B Regular pentagon C Irregular pentagon D Irregular hexagon E Regular hexagon F Regular octagon</p>	<p>8 Name the type of shape</p> 	<p>A Irregular hexagon B Regular octagon C Regular pentagon D Irregular pentagon E Regular hexagon F Regular quadrilateral</p>