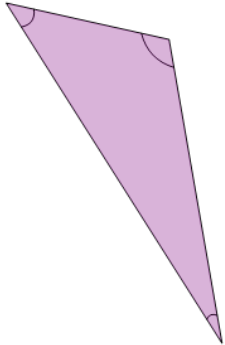




Triangle Classification - Angles - First Time

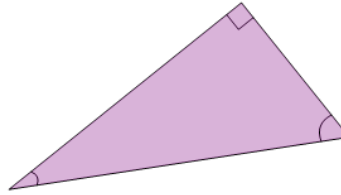
1



In geometry, what's the name for a triangle where one of the angles is more than 90° ?

A	B
Obtuse	Octopus

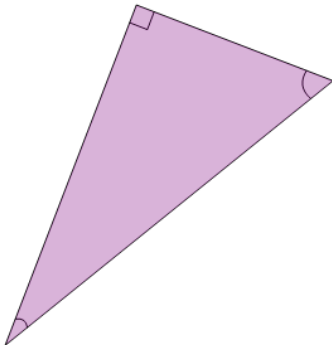
2



In geometry, what's the name for a triangle where one of the angles is equal to 90° ?

A	B
Right	Rheumatoid

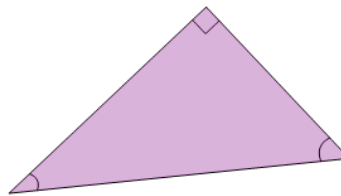
3



In geometry, what's the name for a triangle where one of the angles is equal to 90° ?

A	B
Resting	Right

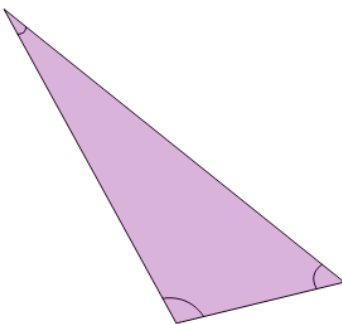
4



In geometry, what's the name for a triangle where one of the angles is equal to 90° ?

A	B
Rheumatoid	Right

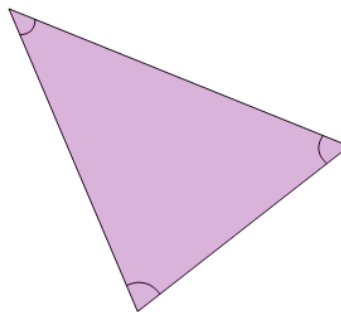
5



In geometry, what's the name for a triangle where one of the angles is more than 90° ?

A	B
Obtuse	Oblong

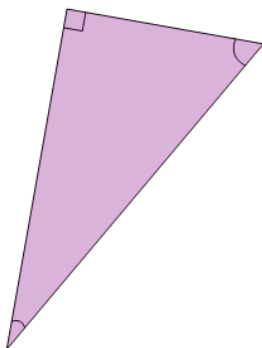
6



In geometry, what's the name for a triangle where all angles are less than 90° ?

A	B
Actual	Acute

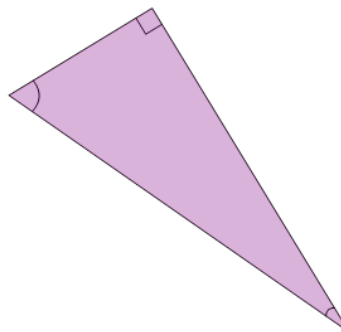
7



In geometry, what's the name for a triangle where one of the angles is equal to 90° ?

A	B
Rheumatoid	Right

8



In geometry, what's the name for a triangle where one of the angles is equal to 90° ?

A	B
Roving	Right